



Nom: \_\_\_\_\_


Date: \_\_\_\_\_


# LES POMMES


Terminez les exercices et écrivez la réponse dans la pomme


$7+1=$  


$1+2=$  


$5+3=$  


$6+2=$  


$2+0=$  


$3+4=$  


$5+0=$  


$3+1=$  


$5+2=$  


$9+0=$  


$4+4=$  


$3+4=$  


$2+4=$  


$5+5=$  


$1+3=$  

$3+1=$  

$4+6=$  

$3+4=$  

$2+6=$  

$3+3=$  

$2+6=$  